

Forensic Footwear Activities

Activity 6 – Quiz, Test your knowledge!!

This worksheet is a summary of the previous five activities to test your knowledge!

Fill in the blanks.

1. Footwear impressions can be used as _____ within a range of criminal investigations.
2. A _____ is an indentation or an _____ left on a surface by a foot.
3. When taking photographs at crime scenes the protocols regarding the chain of _____ must be adhered to.
4. _____ impressions can be _____ or _____ in form, depending on whether the surface that has been stepped on is hard or soft.
5. The estimation of _____ by measurement of various _____ bones have been attempted with varying degrees of success.
6. Searching the crime scene using a high intensity _____ at various _____ helps the crime scene investigator locate latent impressions.
7. Friction _____ on the soles of the feet were formed during the development of the _____ in the womb.


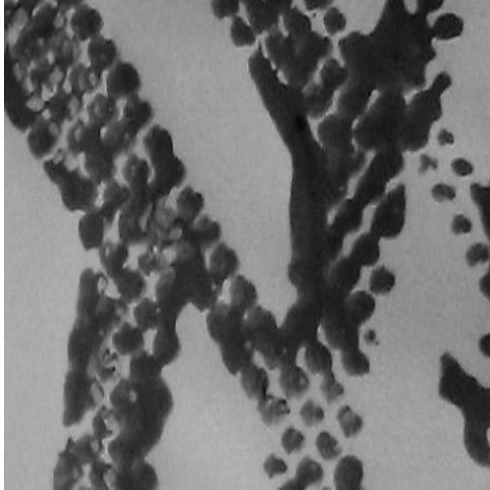
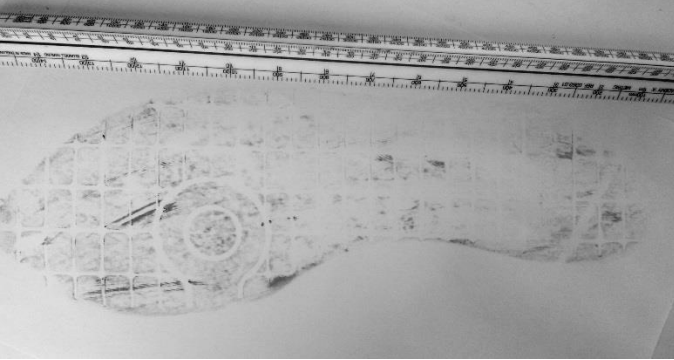
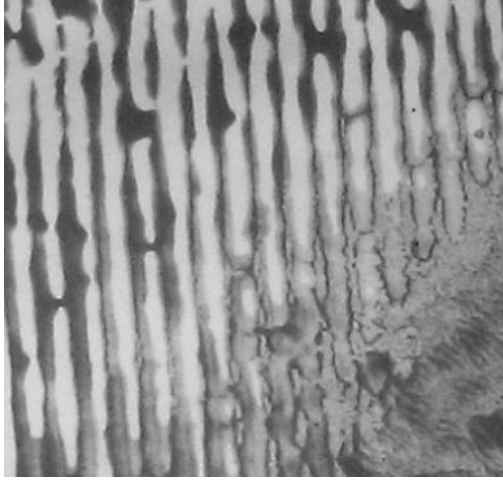

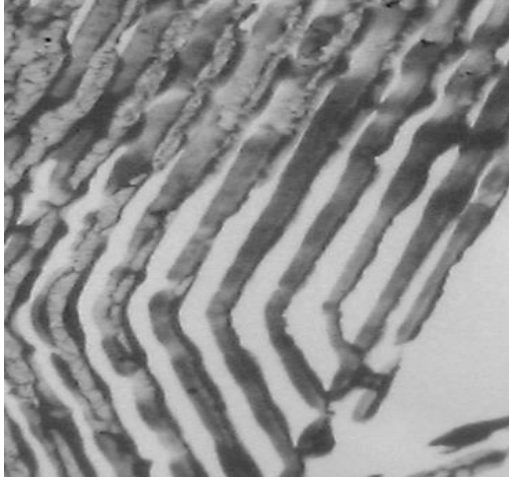
True or False

8. Cases sometimes occur in which burglars lacking gloves for their hands have taken off their socks and put them on their hands to avoid leaving fingerprints. _____
9. Footwear impressions are only made when a suspect leaves a crime scene. _____
10. Many 2-D impressions are not readily visible with the naked eye. _____
11. If an error is made while taking photographs at a crime scene the bad photographs are deleted. _____
12. Ridge patterns called loops, whorls and arches are found on both fingerprints and footprints. _____
13. The crime scene should be photographed from a variety of angles to give differing perspectives. _____
14. A graduated scale is the only thing needed to authenticate a crime scene photograph. _____
15. The value of footprints are on par with those of fingerprints found at crime scenes. _____
16. The width of a footprint would indicate the height of owner of the print. _____





Forensic Footwear Activities

Partial Print Matching

Write the letter of the whole shoe print that the partial shoe prints correspond to. Can you find the trick print that doesn't match?

Footwear Impression	Partial Print
A 	1 
B 	2 
C 	3 

Forensic Footwear Activities

<p>D</p> 	<p>4</p> 
<p>E</p> 	

Answer table

Footwear Impression	Matching Partial Print
A	
B	
C	
D	
E	